



# MATH

Time to  
the  $\frac{1}{2}$   
hour





**M:** Record the digital time below each clock.



**T:** Read the digital time and draw it on the analog clock.



**W:** Match the digital time with the analog clock.



**TH:** Answer the following story problem and draw the answer on the clocks.

Johnny has baseball practice at 3:30 and it is 2 and a half hours long. What time does it end?



Practice starts






Practice ends

# PHONICS

short i  
CVC

**M:**

Trace the letters, add "i" to the middle, read, and illustrate.



p g

t p

f n


**T:**

Read the words below. If the word is real, color in the box with a crayon.

hit	mik	sip	bim
rip	bit	dip	nil
wid	kig	kid	him

**W:**

Circle the word that describes each picture.



hip

pig

kid



fit

dip

zip



six

mix

tip

**TH:**

Use the following words to write a silly sentence:

six

hit

pig

\_\_\_\_\_

\_\_\_\_\_

\_\_\_\_\_




\_\_\_\_\_

\_\_\_\_\_

# PHONICS

long i  
CVCe

**M:** Trace the letters, add "i" to the middle, read, and illustrate.



bike


five

tree

**T:** Read the words below. If the word is real, color in the box with a crayon.

time	jike	pile	nide
tire	fire	side	wige
lime	bide	kibe	nine


**W:** Circle the word that describes each picture.



mile  
mice  
dime



lime  
nine  
lite



pine  
kite  
tike

**TH:** Use the following words to write a silly sentence:

fire

five

pile

\_\_\_\_\_

\_\_\_\_\_

\_\_\_\_\_

\_\_\_\_\_

\_\_\_\_\_