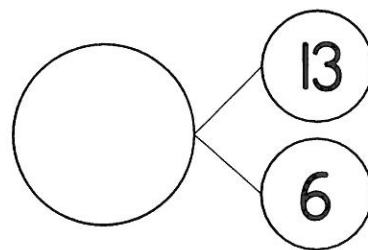
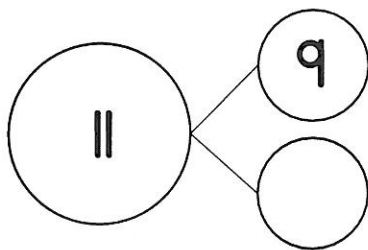
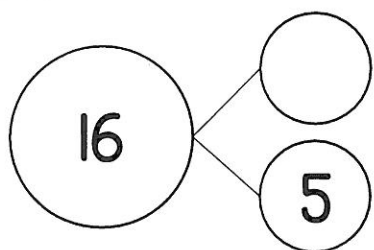


# MATH

Missing  
addends

**M:** Complete the number bonds below:



**T:** Solve the missing addend problems below:

$$6 + \square = 10$$

$$\square + 9 = 15$$

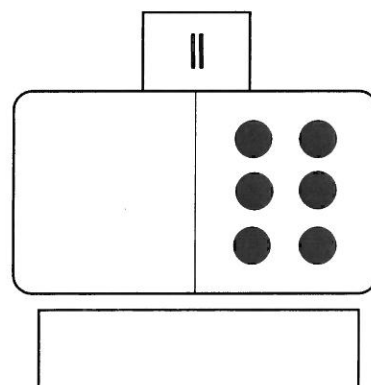
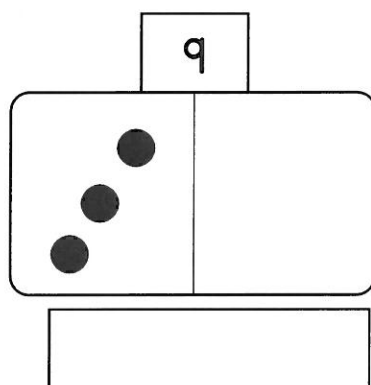
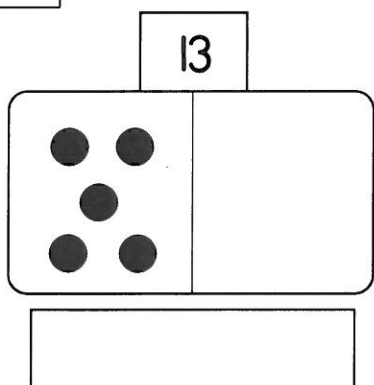
$$3 + \square = 11$$

$$2 + \square = 7$$

$$\square + 4 = 8$$

$$\square + 5 = 20$$

**W:** Complete the dominoes and write a number sentence to explain:



**TH:** Balance each scale below. Both sides need to be equal.

