

MATH

Subtraction
within 20

M: Complete each addition problem below:

$$\begin{array}{r} 15 \\ - 3 \\ \hline \end{array}$$

$$\begin{array}{r} 9 \\ - 4 \\ \hline \end{array}$$

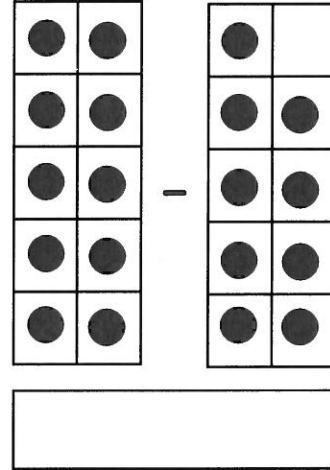
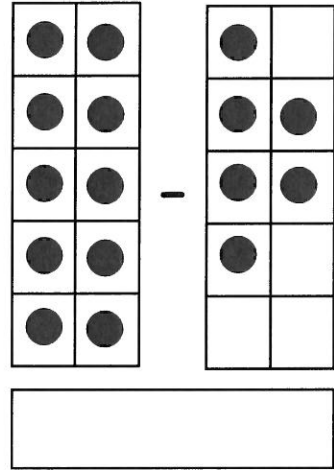
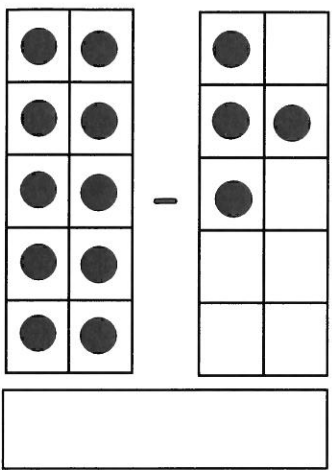
$$\begin{array}{r} 19 \\ - 8 \\ \hline \end{array}$$

$14 - 7 =$

$12 - 10 =$

$10 - 6 =$

T: Subtract the 10 frames below and record the number sentence:



W: Complete each subtraction problem below:

$$\begin{array}{r} 20 \\ - 9 \\ \hline \end{array}$$

$$\begin{array}{r} 10 \\ - 3 \\ \hline \end{array}$$

$$\begin{array}{r} 18 \\ - 4 \\ \hline \end{array}$$

$8 - 6 =$

$11 - 2 =$

$13 - 6 =$

TH: Find the difference on each ball. If the difference is even, color it yellow. If the difference is odd, color it green.

