

MATH

three
addends

M: Solve the addition problems below:

$5 + 2 + 10 =$

$7 + 8 + 2 =$



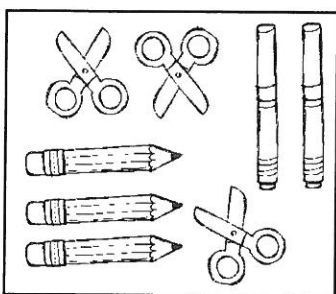
$12 + 4 + 1 =$

$4 + 3 + 9 =$

$5 + 5 + 5 =$

$8 + 6 + 2 =$

T: Write a number sentence for the pictures shown below.



W: Solve the addition problems below:

$9 + 4 + 3 =$

$5 + 7 + 1 =$

$14 + 2 + 4 =$

$1 + 11 + 6 =$

$4 + 9 + 4 =$

$17 + 1 + 0 =$

$0 + 14 + 2 =$

$2 + 2 + 9 =$

$3 + 8 + 2 =$

TH: Solve the story problem below. Show your work and write the equation.

Ally, George, and Ben were all in a group. They each got 6 new stickers.

How many stickers did they get in all?