

# MATH

Addition  
within 20

**M:** Complete each addition problem below:

$$\begin{array}{r} 5 \\ + 4 \\ \hline \end{array}$$

$$\begin{array}{r} 12 \\ + 3 \\ \hline \end{array}$$

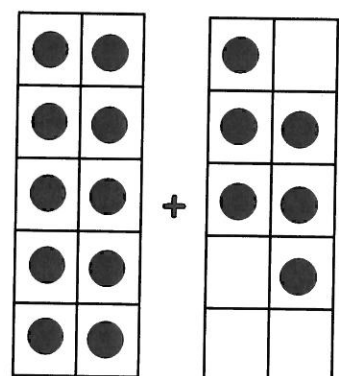
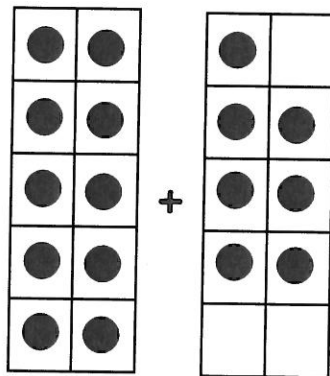
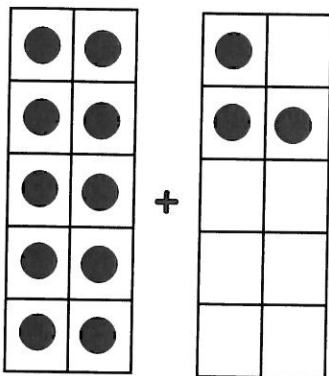
$$\begin{array}{r} 9 \\ + 8 \\ \hline \end{array}$$

$9 + 11 =$

$6 + 6 =$

$10 + 3 =$

**T:** Add the 10 frames below and record the number sentence:



**W:** Complete each addition problem below:

$$\begin{array}{r} 2 \\ + 9 \\ \hline \end{array}$$

$$\begin{array}{r} 0 \\ + 14 \\ \hline \end{array}$$

$$\begin{array}{r} 3 \\ + 4 \\ \hline \end{array}$$

$13 + 5 =$

$16 + 1 =$

$15 + 5 =$

**TH:** Find the sum in each pail. If the sum is even, color it green. If the sum is odd, color it red.

