

# MATH

subtraction  
story  
problems

**M:** Solve the story problem below and show your work.

Bill has 5 blue cars and 9 yellow cars.  
How many more yellow cars does Bill  
have?

$$\text{---} - \text{---} = \text{---}$$

**T:** Solve the story problem below and show your work.

I started with 20 crackers.  
I gave 6 to my mom, 8 to my brother,  
and I kept the rest. How many crackers  
was I left with?

$$\text{---} - \text{---} - \text{---} = \text{---}$$

**W:** Solve the story problem below and show your work.

Nancy picked 14 flowers. She gave 9 of  
them to her grandmother. How many  
does she have left?

Write the number sentence below:

**TH:** Solve the story problem below. Show your work and write the equation.

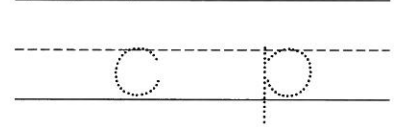

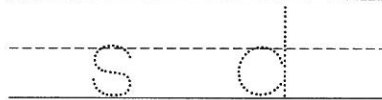

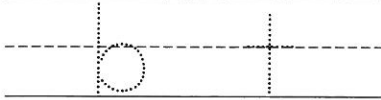

Freddy has 18 balloons. 7 are red, 3 are blue and the rest are yellow.  
How many are yellow?

# PHONICS

short a  
CVC

**M:**

Trace the letters, add "a" to the middle, read, and illustrate.



**T:**

Read the words below. If the word is real, color in the box with a crayon.

tag	haf	mat	lav
pal	gab	cat	sat
rab	mad	wag	rab

**W:**

Circle the word that describes each picture.



tap  
mad  
hat



lap  
bat  
rat



cat  
pal  
bag

**TH:**

Use the following words to write a silly sentence:

bag

rat

mad

\_\_\_\_\_

\_\_\_\_\_

\_\_\_\_\_

\_\_\_\_\_




\_\_\_\_\_

# PHONICS

long a  
CVCe

**M:**

Trace the letters, add "a" to the middle, read, and illustrate.



c k e

w v e

t r a c e

**T:**

Read the words below. If the word is real, color in the box with a crayon.

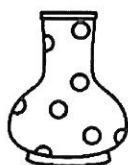
made	fane	take	pate
bake	rake	same	hane
vase	name	gate	cape

**W:**

Circle the word that describes each picture.



tale  
tape  
tame



mane  
late  
vase



rake  
male  
sale

**TH:**

Use the following words to write a silly sentence:

same

cape

Jake

\_\_\_\_\_

\_\_\_\_\_

\_\_\_\_\_

\_\_\_\_\_

\_\_\_\_\_